


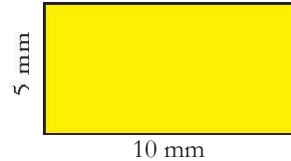
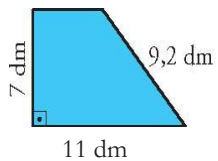
CALCULO DE ÁREAS Y PERÍMETROS

1 Halla el área y el perímetro de las figuras coloreadas de los siguientes ejercicios:



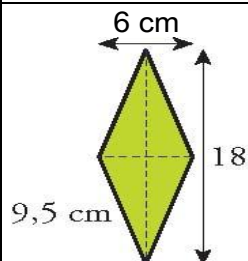
PERIMETRO:

ÁREA:



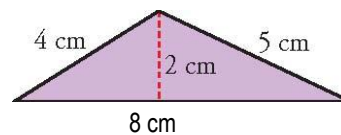
PERIMETRO:

ÁREA



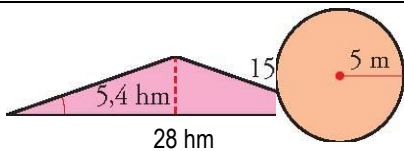
PERIMETRO:

ÁREA



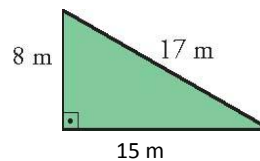
PERIMETRO:

ÁREA



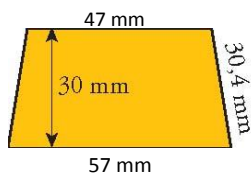
PERIMETRO:

ÁREA



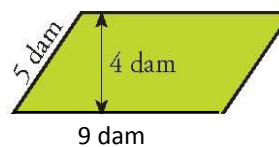
PERIMETRO:

ÁREA



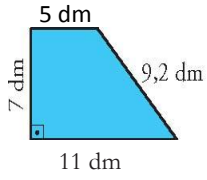
PERIMETRO:

ÁREA



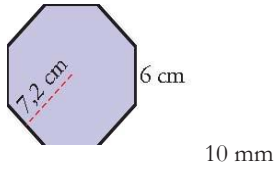
PERIMETRO:

ÁREA

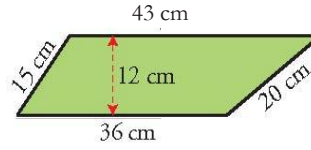


PERIMETRO:

ÁREA

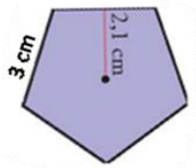


10 mm



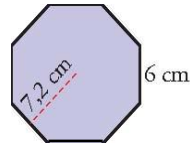
PERIMETRO:

ÁREA



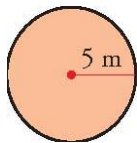
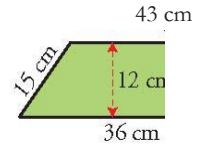
PERIMETRO:

ÁREA



PERIMETRO:

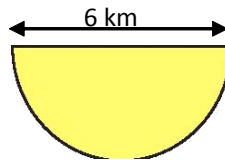
ÁREA



8 m

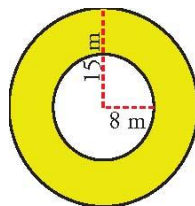
PERIMETRO:

ÁREA



PERIMETRO:

ÁREA



ÁREA